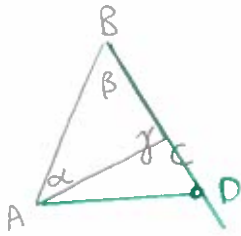


Exercise 1: (a) Given a triangle $\triangle ABC$ in which $AB > BC$, prove that the angles opposite these sides are also not congruent, and in fact that the angle opposite \overline{AB} is larger than the angle opposite \overline{BC} .



Choose a point D on ray \overrightarrow{BC} s.t.
 $BD = AB$

So $\triangle ABD$ is an isosceles triangle, and the angles $\angle BAD \cong \angle BDA$.

- Since $BC < BD$, we can see that C is inside the angle $\angle BAD$, and in particular, $\alpha < m(\angle BAD) = m(\angle BDA)$
 - On the other hand, by the exterior angle theorem, applied to the triangle $\triangle ACD$ and the exterior angle γ , $\gamma > m(\angle BDA)$.
- $\therefore \alpha < \gamma$ as claimed.

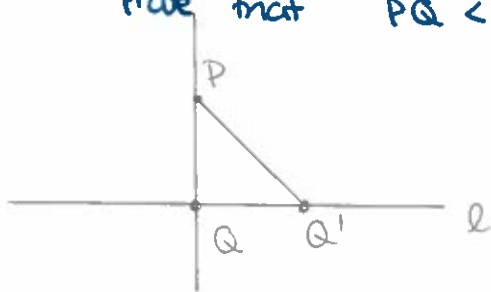
(b) Let ℓ be a line and P a point not on ℓ .

Drop the perpendicular from P to ℓ , meeting ℓ at Q , say.

The distance from P to ℓ is PQ .

Let $Q' \in \ell$ be any point not equal to Q .

Prove that $PQ < PQ'$.



• if $PQ > PQ'$, the angles opposite would satisfy $\angle PQ'Q > \angle PQQ' = 90^\circ$.

But then the angle sum would be $> 180^\circ$. #

• also if $PQ = PQ'$, then we would have an isosceles triangle with both base angles 90° , so angle sum is again $> 180^\circ$

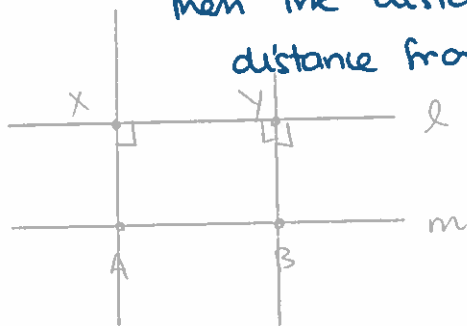
#

(Many other proofs are possible!)

(c) Prove that Playfair's Postulate implies the following:

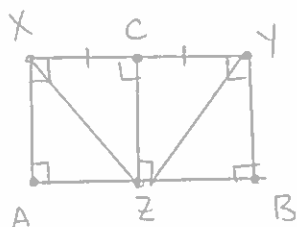
(*) Let l, m be two parallel lines, and let $A, B \in \mathbb{R}^2 \setminus m$.

Then the distance from A to l is equal to the distance from B to l .



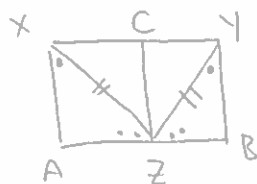
- First draw the perpendiculars to l through A and B . Label the intersection points by X and Y .

- Let C be the midpoint of \overline{XY} , and drop a perpendicular from C to m .



- By Prop 29 (which follows from PP) we have right angles everywhere

\Rightarrow By SAS, $\triangle XCZ \cong \triangle YCZ$.



- Since $\angle AXZ + \angle ZXC = 90^\circ$

$\angle BYZ + \angle ZYC = 90^\circ$

and $\angle ZXC \cong \angle ZYC$, we

see that $\angle AXZ \cong \angle BYZ$

Similarly, $\angle AZX \cong \angle BZY$.

So by ASA, $\triangle AXZ \cong \triangle BZY$, and in particular

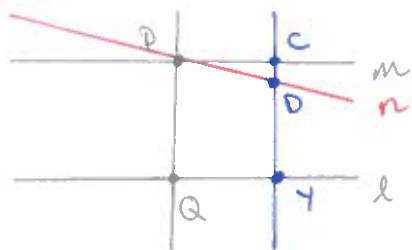
$AX = BY$ as claimed.

(d) prove the converse.

Let l be a line, and P a point not on l .

By drawing two perpendiculars we get a parallel line m through P .

We want to show it is unique.



Suppose towards a contradiction that m is another line through P parallel to l .

Choose a point $Y \neq Q$ on l , and draw a line n through Y perpendicular to l , intersecting

m and n at C and D .

By def, the distance from C to l is CY ; likewise the distance from D to l is DY , but these must both be PQ . $\therefore C=D$ and $m=n$

Exercise 2:

- (a) let c be a circle with centre O and radius r .
let P be any point. Define the power of P w.r.t. c .

$$\text{Power of } P = (PO)^2 - r^2$$

- (b) Prove that $\text{Power}(P) \begin{cases} > 0 \\ = 0 \\ < 0 \end{cases} \Rightarrow \begin{matrix} P \text{ is outside the circle} \\ P \text{ is on the boundary} \\ P \text{ is inside the circle.} \end{matrix}$

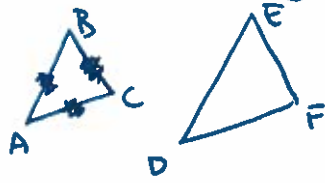
• $(PO)^2 - r^2 > 0 \Rightarrow PO > r$ (since both are positive)
 $\Rightarrow P$ is outside c .

• Likewise, $(PO)^2 - r^2 = 0 \Rightarrow PO = r$
 $\Rightarrow P$ is on the circle

$(PO)^2 - r^2 < 0 \Rightarrow PO < r$
 $\Rightarrow P$ is inside the circle

Exercise 4. Prove SSS similarity:

Suppose we have



$$\text{s.t. } \frac{AB}{DE} = \frac{BC}{EF} = \frac{AC}{DF}.$$

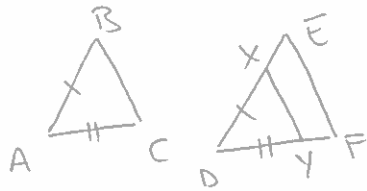
Prove that the triangles are similar.

- If $AB = DE$, then all sides are congruent, and $\triangle ABC \cong \triangle DEF$ by SSS congruence

So WLOG assume $AB < DE$, and hence $AC < DF$

Choose X on \overline{DE} s.t. $DX = AB$

Y on \overline{DF} s.t. $DY = AC$



• Now by SAS similarity

$$\triangle DXY \sim \triangle DEF$$

$$\text{In particular, } \frac{XY}{EF} = \frac{DX}{DE} = \frac{AB}{DE} = \frac{BC}{DF}$$

$$\dots \Rightarrow XY = BC.$$

∴ By SSS congruence, $\triangle ABC \cong \triangle DXY$, and since we already know that $\triangle DXY \sim \triangle DEF$, we conclude that $\triangle ABC \sim \triangle DEF$ as desired.